

MATHEMATICS A

Wednesday, August 13, 2008 — 8:30 to 11:30 a.m., only

Print Your Name:

Print Your School's Name:

Print your name and the name of your school in the boxes above. Then turn to the last page of this booklet, which is the answer sheet for Part I. Fold the last page along the perforations and, slowly and carefully, tear off the answer sheet. Then fill in the heading of your answer sheet.

Scrap paper is not permitted for any part of this examination, but you may use the blank spaces in this booklet as scrap paper. A perforated sheet of scrap graph paper is provided at the end of this booklet for any question for which graphing may be helpful but is not required. You may remove this sheet from this booklet. Any work done on this sheet of scrap graph paper will *not* be scored. All work should be written in pen, except graphs and drawings, which should be done in pencil.

This examination has four parts, with a total of 39 questions. You must answer all questions in this examination. Write your answers to the Part I multiple-choice questions on the separate answer sheet. Write your answers to the questions in Parts II, III, and IV directly in this booklet. Clearly indicate the necessary steps, including appropriate formula substitutions, diagrams, graphs, charts, etc.

When you have completed the examination, you must sign the statement printed at the end of the answer sheet, indicating that you had no unlawful knowledge of the questions or answers prior to the examination and that you have neither given nor received assistance in answering any of the questions during the examination. Your answer sheet cannot be accepted if you fail to sign this declaration.

Notice . . .

A minimum of a scientific calculator, a straightedge (ruler), and a compass must be available for you to use while taking this examination.

The use of any communications device is strictly prohibited when taking this examination. If you use any communications device, no matter how briefly, your examination will be invalidated and no score will be calculated for you.

DO NOT OPEN THIS EXAMINATION BOOKLET UNTIL THE SIGNAL IS GIVEN.

**Use this space for
computations.**

5 Andy drives 80 miles to get to the Thruway, drives 100 miles on the Thruway, and then drives an additional 75 miles after leaving the Thruway. If the entire trip took 5 hours and he made no stops, what was his average speed, in miles per hour?

- (1) 51 (3) 250
(2) 65 (4) 255

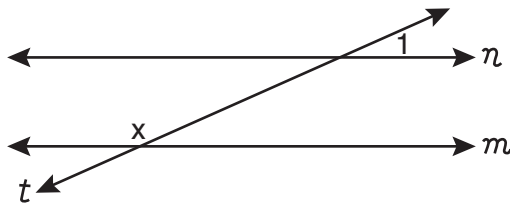
6 Which property is illustrated by the equation $4x(2x - 1) = 8x^2 - 4x$?

- (1) associative (3) distributive
(2) commutative (4) identity

7 What is the sum of $2m^2 + 3m - 4$ and $m^2 - 3m - 2$?

- (1) $m^2 - 6$
(2) $3m^2 - 6$
(3) $3m^2 + 6m - 6$
(4) $m^2 + 6m - 2$

8 In the accompanying diagram, line n is parallel to line m , line t is a transversal, and $m\angle 1 = 24$.



What does x equal, in degrees?

- (1) 24 (3) 114
(2) 66 (4) 156

**Use this space for
computations.**

9 If a machine that prints designs on T-shirts prints 500 shirts in 3 hours, how many hours will it take to print designs on 1,800 shirts?

- (1) 6
(2) 9.8
(3) 10.8
(4) 12

10 The sum of two negative numbers always has to be

- (1) negative
(2) positive
(3) zero
(4) an integer

11 The width, w , of a rectangular rug is 4 less than its length, ℓ . Which expression represents the area of the rug?

- (1) $\ell(4 - \ell)$
(2) $\ell(\ell - 4)$
(3) $2(\ell - 4) + 2\ell$
(4) $2w + 2\ell$

12 What is the value of m in the equation $2m - (m + 1) = 0$?

- (1) 1
(2) -1
(3) $\frac{1}{3}$
(4) 0

13 What is the converse of the statement “If $a^2 + b^2 = c^2$, then $\triangle ABC$ is a right triangle”?

- (1) If $\triangle ABC$ is a right triangle, then $a^2 + b^2 = c^2$.
(2) $a^2 + b^2 = c^2$ if, and only if, $\triangle ABC$ is a right triangle.
(3) If $\triangle ABC$ is not a right triangle, then $a^2 + b^2 \neq c^2$.
(4) If $a^2 + b^2 \neq c^2$, then $\triangle ABC$ is not a right triangle.

Use this space for
computations.

14 Pentagon $ABCDE$ is similar to pentagon $FGHIJ$. The lengths of the sides of $ABCDE$ are 8, 9, 10, 11, and 12. If the length of the longest side of pentagon $FGHIJ$ is 18, what is the perimeter of pentagon $FGHIJ$?

- (1) 50 (3) 75
(2) 56 (4) 100

15 Which inequality is shown on the accompanying graph?



- (1) $x < -1$ (3) $x > -1$
(2) $x \leq -1$ (4) $x \geq -1$

16 A teacher wants to divide her class into groups. Which expression represents the number of different 3-person groups that can be formed from a class of 22 students?

- (1) $3!$ (3) ${}_{22}P_3$
(2) ${}_{22}C_3$ (4) $22 \cdot 21 \cdot 20$

17 What is $6x^3 + 4x^2 + 2x$ divided by $2x$?

- (1) $3x^2 + 2x$
(2) $3x^2 + 2x + 1$
(3) $4x^2 + 2x$
(4) $4x^2 + 2x + 1$

18 The greatest common factor of $4a^2b$ and $6ab^3$ is

- (1) $2ab$ (3) $12ab$
(2) $2ab^2$ (4) $24a^3b^4$

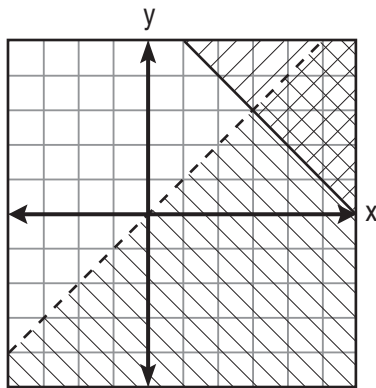
Use this space for computations.

- 19 The statement “Maya plays on the basketball team or Maya joins the ski club” is *false*. Which statement is true?
- (1) Maya plays on the basketball team and Maya joins the ski club.
 - (2) Maya plays on the basketball team and Maya does not join the ski club.
 - (3) Maya does not play on the basketball team and Maya joins the ski club.
 - (4) Maya does not play on the basketball team and Maya does not join the ski club.

- 20 The measures of five of the interior angles of a hexagon are 150° , 100° , 80° , 165° , and 150° . What is the measure of the sixth interior angle?
- (1) 75°
 - (2) 80°
 - (3) 105°
 - (4) 180°

- 21 For which value of x is the expression $\frac{3x - 3}{x - 5}$ undefined?
- (1) 1
 - (2) -1
 - (3) 5
 - (4) -5

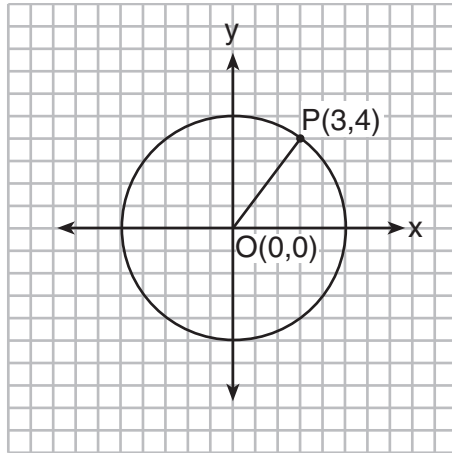
- 22 Which point is in the solution set of the system of inequalities shown on the accompanying graph?



- (1) (0,0)
- (2) (3,3)
- (3) (5,2)
- (4) (2,3)

Use this space for
computations.

- 23 In the accompanying diagram, the center of circle O is $(0,0)$, and the coordinates of point P are $(3,4)$. If \overline{OP} is a radius, what is the equation of the circle?



- (1) $x^2 + y^2 = 5$ (3) $x^2 + y^2 = 16$
(2) $x^2 + y^2 = 9$ (4) $x^2 + y^2 = 25$
- 24 The expression $(-4a^3b)^2$ is equivalent to
(1) $-16a^6b^2$ (3) $16a^5b^2$
(2) $16a^6b^2$ (4) $8a^6b^2$
- 25 For which equation is the solution set $\{-5,2\}$?
(1) $x^2 + 3x - 10 = 0$ (3) $x^2 + 3x = -10$
(2) $x^2 - 3x = 10$ (4) $x^2 - 3x + 10 = 0$
- 26 When the Smith family decided to have their new house built, they found that there were 60 different choices involving location, style, and color. If they had their choice of 2 locations and 5 styles, how many choices of color did they have?
(1) 6 (3) 50
(2) 12 (4) 53

**Use this space for
computations.**

29 Which statement is logically equivalent to “If I sleep, then I will not eat”?

- (1) If I do not sleep, then I will eat.
- (2) If I eat, then I will not sleep.
- (3) If I eat, then I will sleep.
- (4) If I do not eat, then I will sleep.

30 Phil is cutting a triangular piece of tile. If the triangle is scalene, which set of numbers could represent the lengths of the sides?

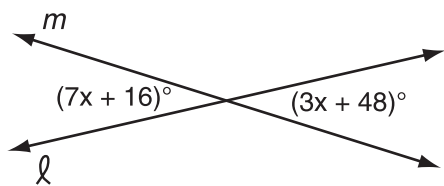
- (1) {2,4,7}
 - (2) {4,5,6}
 - (3) {3,5,8}
 - (4) {5,5,8}
-

Part II

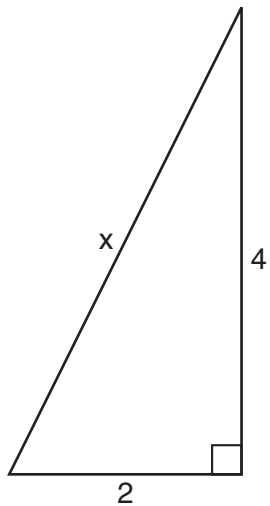
Answer all questions in this part. Each correct answer will receive 2 credits. Clearly indicate the necessary steps, including appropriate formula substitutions, diagrams, graphs, charts, etc. For all questions in this part, a correct numerical answer with no work shown will receive only 1 credit. [10]

31 Solve for x : $0.35x + 0.6 = 0.1x + 1$


- 32 The accompanying diagram shows intersecting lines ℓ and m . Solve for the value of x .



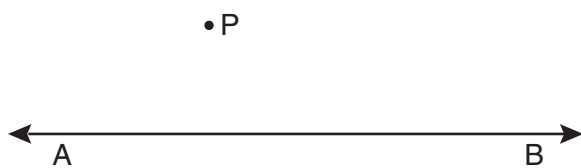
33 Theo determined that the correct length of the hypotenuse of the right triangle in the accompanying diagram is $\sqrt{20}$. Fiona found the length of the hypotenuse to be $2\sqrt{5}$. Is Fiona's answer also correct? Justify your answer.



34 One endpoint of a line segment is $(6,2)$. The midpoint of the segment is $(2,0)$. Find the coordinates of the other endpoint. [The use of the accompanying grid is optional.]



35 Using a compass and straightedge, construct the line that is perpendicular to \overleftrightarrow{AB} and that passes through point P . Show all construction marks.

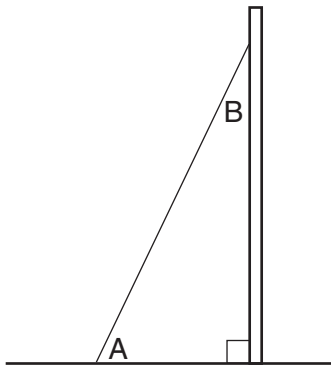


Part III

Answer all questions in this part. Each correct answer will receive 3 credits. Clearly indicate the necessary steps, including appropriate formula substitutions, diagrams, graphs, charts, etc. For all questions in this part, a correct numerical answer with no work shown will receive only 1 credit. [6]

- 36 The mean of three numbers is 25. The second number is four less than twice the first. The third number is two more than four times the first. Find the *smallest* number.

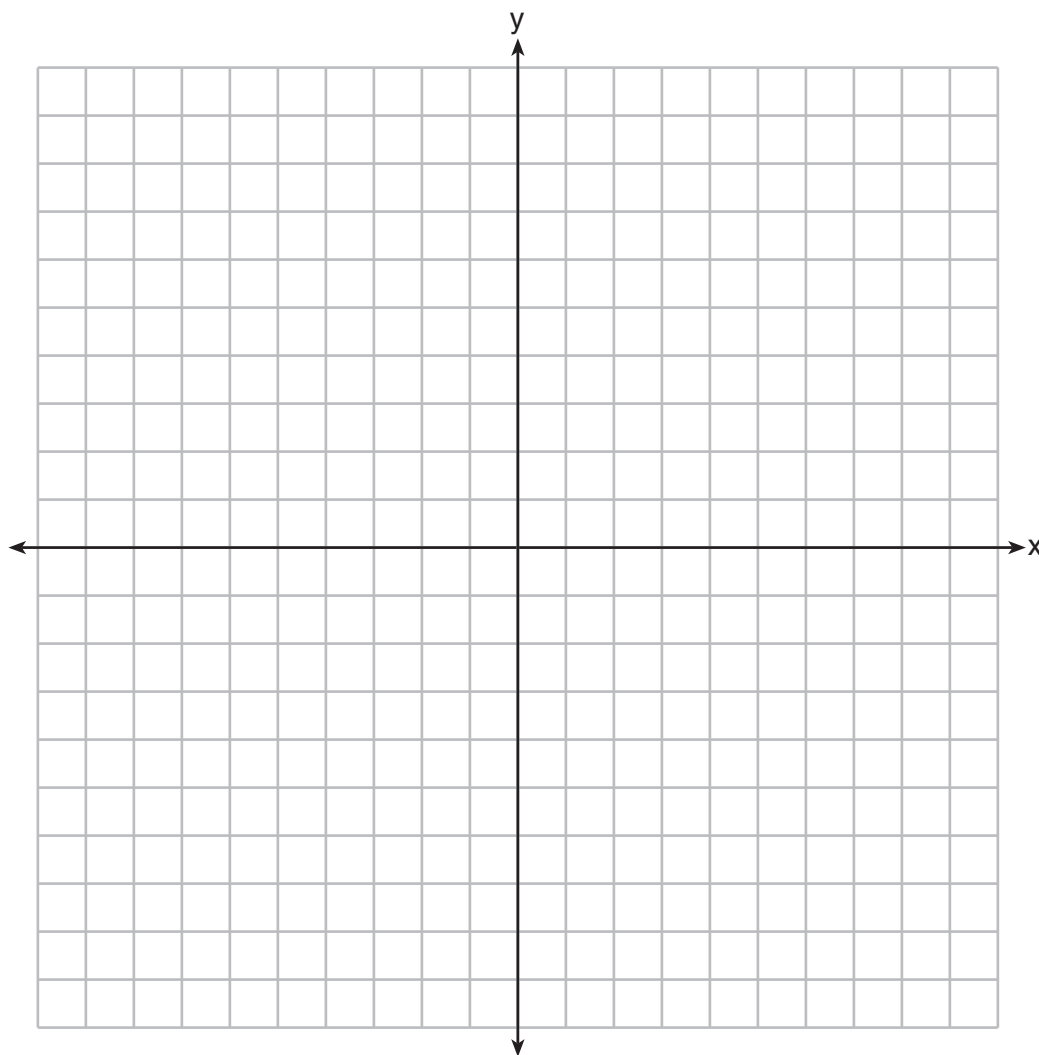
- 37 A billboard on level ground is supported by a brace, as shown in the accompanying diagram. The measure of angle A is 15° greater than twice the measure of angle B . Determine the measure of angle A and the measure of angle B .



Part IV

Answer all questions in this part. Each correct answer will receive 4 credits. Clearly indicate the necessary steps, including appropriate formula substitutions, diagrams, graphs, charts, etc. For all questions in this part, a correct numerical answer with no work shown will receive only 1 credit. [8]

38 On the accompanying set of axes, draw $\triangle ABC$, whose coordinates are $A(-7,9)$, $B(-2,8)$, and $C(-3,4)$. Then draw, label, and state the coordinates of $\triangle A'B'C'$, the image of $\triangle ABC$ after the transformation that maps (x,y) to $(-x,-y)$. Based on your diagram, identify the type of transformation that was performed.




39 Solve the following system of equations algebraically or graphically for x and y :

$$y = x^2 + 4x + 6$$

$$y = 2x + 6$$


Question 39 continued




Scrap Graph Paper — This sheet will *not* be scored.

Tear Here

Tear Here



Scrap Graph Paper — This sheet will *not* be scored.



Tear Here

Tear Here

Tear Here

The University of the State of New York

REGENTS HIGH SCHOOL EXAMINATION

MATHEMATICS A

Wednesday, August 13, 2008 — 8:30 to 11:30 a.m., only

ANSWER SHEET

Student Sex: Male Female Grade

Teacher School

Your answers to Part I should be recorded on this answer sheet.

Part I

Answer all 30 questions in this part.

- 1 9 17 25
2 10 18 26
3 11 19 27
4 12 20 28
5 13 21 29
6 14 22 30
7 15 23
8 16 24

Your answers for Parts II, III, and IV should be written in the test booklet.

The declaration below should be signed when you have completed the examination.

I do hereby affirm, at the close of this examination, that I had no unlawful knowledge of the questions or answers prior to the examination and that I have neither given nor received assistance in answering any of the questions during the examination.

Signature

Tear Here

FOR TEACHERS ONLY

The University of the State of New York

REGENTS HIGH SCHOOL EXAMINATION

MATHEMATICS A

Wednesday, August 13, 2008 — 8:30 to 11:30 a.m., only

SCORING KEY

Mechanics of Rating

The following procedures are to be followed for scoring student answer papers for the Mathematics A examination. More detailed information about scoring is provided in the publication *Information Booklet for Scoring the Regents Examinations in Mathematics A and Mathematics B*.

Use only *red* ink or *red* pencil in rating Regents papers. Do *not* attempt to correct the student's work by making insertions or changes of any kind. Use check marks to indicate student errors.

Unless otherwise specified, mathematically correct variations in the answers will be allowed. Units need not be given when the wording of the questions allows such omissions.

Each student's answer paper is to be scored by a minimum of three mathematics teachers. On the back of the student's detachable answer sheet, raters must enter their initials in the boxes next to the questions they have scored and also write their name in the box under the heading "Rater's/Scorer's Name."

Raters should record the student's scores for all questions and the total raw score on the student's detachable answer sheet. Then the student's total raw score should be converted to a scaled score by using the conversion chart that will be posted on the Department's web site <http://www.emsc.nysed.gov/osa/> on Wednesday, August 13, 2008. The student's scaled score should be entered in the box provided on the student's detachable answer sheet. The scaled score is the student's final examination score.

Part I

Allow a total of 60 credits, 2 credits for each of the following. Allow credit if the student has written the correct answer instead of the numeral 1, 2, 3, or 4.

(1) 4	(6) 3	(11) 2	(16) 2	(21) 3	(26) 1
(2) 4	(7) 2	(12) 1	(17) 2	(22) 3	(27) 2
(3) 3	(8) 4	(13) 1	(18) 1	(23) 4	(28) 4
(4) 1	(9) 3	(14) 3	(19) 4	(24) 2	(29) 2
(5) 1	(10) 1	(15) 4	(20) 1	(25) 1	(30) 2

Updated information regarding the rating of this examination may be posted on the New York State Education Department’s web site during the rating period. Check this web site <http://www.emsc.nysed.gov/osa/> and select the link “Examination Scoring Information” for any recently posted information regarding this examination. This site should be checked before the rating process for this examination begins and several times throughout the Regents examination period.

General Rules for Applying Mathematics Rubrics

I. General Principles for Rating

The rubrics for the constructed-response questions on the Regents Examinations in Mathematics A and Mathematics B are designed to provide a systematic, consistent method for awarding credit. The rubrics are not to be considered all-inclusive; it is impossible to anticipate all the different methods that students might use to solve a given problem. Each response must be rated carefully using the teacher’s professional judgment and knowledge of mathematics; all calculations must be checked. The specific rubrics for each question must be applied consistently to all responses. In cases that are not specifically addressed in the rubrics, raters must follow the general rating guidelines in the publication *Information Booklet for Scoring the Regents Examinations in Mathematics A and Mathematics B*, use their own professional judgment, confer with other mathematics teachers, and/or contact the consultants at the State Education Department for guidance. During each Regents examination administration period, rating questions may be referred directly to the Education Department. The contact numbers are sent to all schools before each administration period.

II. Full-Credit Responses

A full-credit response provides a complete and correct answer to all parts of the question. Sufficient work is shown to enable the rater to determine how the student arrived at the correct answer.

When the rubric for the full-credit response includes one or more examples of an acceptable method for solving the question (usually introduced by the phrase “such as”), it does **not** mean that there are no additional acceptable methods of arriving at the correct answer. Unless otherwise specified, mathematically correct alternative solutions should be awarded credit. The only exceptions are those questions that specify the type of solution that must be used; e.g., an algebraic solution or a graphic solution. A correct solution using a method other than the one specified is awarded half the credit of a correct solution using the specified method.

III. Appropriate Work

Full-Credit Responses: The directions in the examination booklet for all the constructed-response questions state: “Clearly indicate the necessary steps, including appropriate formula substitutions, diagrams, charts, etc.” The student has the responsibility of providing the correct answer **and** showing how that answer was obtained. The student must “construct” the response; the teacher should not have to search through a group of seemingly random calculations scribbled on the student paper to ascertain what method the student may have used.

Responses With Errors: Rubrics that state “Appropriate work is shown, but ...” are intended to be used with solutions that show an essentially complete response to the question but contain certain types of errors, whether computational, rounding, graphing, or conceptual. If the response is incomplete, i.e., an equation is written but not solved or an equation is solved but not all of the parts of the question are answered, appropriate work has **not** been shown. Other rubrics address incomplete responses.

IV. Multiple Errors

Computational Errors, Graphing Errors, and Rounding Errors: Each of these types of errors results in a 1-credit deduction. Any combination of two of these types of errors results in a 2-credit deduction. No more than 2 credits should be deducted for such mechanical errors in any response. The teacher must carefully review the student’s work to determine what errors were made and what type of errors they were.

Conceptual Errors: A conceptual error involves a more serious lack of knowledge or procedure. Examples of conceptual errors include using the incorrect formula for the area of a figure, choosing the incorrect trigonometric function, or multiplying the exponents instead of adding them when multiplying terms with exponents. A response with one conceptual error can receive no more than half credit.

If a response shows repeated occurrences of the same conceptual error, the student should not be penalized twice. If the same conceptual error is repeated in responses to other questions, credit should be deducted in each response.

If a response shows two (or more) different major conceptual errors, it should be considered completely incorrect and receive no credit.

If a response shows one conceptual error and one computational, graphing, or rounding error, the teacher must award credit that takes into account both errors: i.e., awarding half credit for the conceptual error and deducting 1 credit for each mechanical error (maximum of two deductions for mechanical errors).

Part II

For each question, use the specific criteria to award a maximum of two credits. Unless otherwise specified, mathematically correct alternative solutions should be awarded appropriate credit.

(31) [2] 1.6, and appropriate work is shown.

[1] Appropriate work is shown, but one computational error is made.

or

[1] Appropriate work is shown, but one conceptual error is made.

or

[1] 1.6, but no work is shown.

[0] A zero response is completely incorrect, irrelevant, or incoherent or is a correct response that was obtained by an obviously incorrect procedure.

(32) [2] 8, and appropriate work is shown.

[1] Appropriate work is shown, but one computational error is made.

or

[1] Appropriate work is shown, but one conceptual error is made, such as $7x + 16 + 3x + 48 = 180$.

or

[1] A correct equation is written, but no further correct work is shown.

or

[1] 8, but no work is shown.

[0] A zero response is completely incorrect, irrelevant, or incoherent or is a correct response that was obtained by an obviously incorrect procedure.

MATHEMATICS A – *continued*

- (33) [2] Yes, and both answers are shown to be equivalent using either decimal approximation or simplification of radicals.

[1] Appropriate work is shown, but one computational or rounding error is made.

or

[1] Appropriate work is shown, but one conceptual error is made.

or

[1] Yes, but an incomplete explanation is given, such as stating that $2\sqrt{5}$ and $\sqrt{20}$ are equivalent or that $\sqrt{20}$ simplifies to $2\sqrt{5}$, but no work is shown to support this.

[0] Yes, but no work is shown.

or

[0] A zero response is completely incorrect, irrelevant, or incoherent or is a correct response that was obtained by an obviously incorrect procedure.

- (34) [2] $(-2,-2)$, and appropriate work is shown, such as the use of the midpoint formula, a correct graph of the line segment showing the slope, or an appropriate explanation of how the missing endpoint is found.

[1] Appropriate work is shown, but one computational or graphing error is made.

or

[1] Appropriate work is shown, but one conceptual error is made, such as finding $(4,1)$, the midpoint of the given points.

or

[1] A correct graph of the line segment is drawn, but the coordinates are not stated.

or

[1] $(-2,-2)$, but no work is shown.

[0] A zero response is completely incorrect, irrelevant, or incoherent or is a correct response that was obtained by an obviously incorrect procedure.

MATHEMATICS A – *continued*

(35) [2] A correct construction is drawn, showing all necessary arcs.

[1] All of the construction arcs are drawn, but the perpendicular line is not drawn.

or

[1] A line perpendicular to \overleftrightarrow{AB} is constructed correctly, but it does not pass through point P .

[0] A drawing that is not an appropriate construction is shown.

or

[0] A zero response is completely incorrect, irrelevant, or incoherent or is a correct response that was obtained by an obviously incorrect procedure.

Part III

For each question, use the specific criteria to award a maximum of three credits. Unless otherwise specified, mathematically correct alternative solutions should be awarded appropriate credit.

(36) [3] 11, and appropriate work is shown, such as solving an equation or trial and error with at least three trials and appropriate checks.

[2] Appropriate work is shown, but one computational error is made.

or

[2] Appropriate work is shown to find the three numbers, but a number other than the smallest is identified.

or

[2] The trial-and-error method is used to find the correct solution, but only two trials and appropriate checks are shown.

or

[2] One error is made in representing the three numbers algebraically, but an appropriate equation is written and solved correctly.

[1] Appropriate work is shown, but two or more computational errors are made.

or

[1] Appropriate work is shown, but one conceptual error is made, such as not dividing $7x - 2$ by 3.

or

[1] Two errors are made in representing the three numbers algebraically, but an appropriate equation is written and solved correctly.

or

[1] The trial-and-error method is attempted and at least six systematic trials and appropriate checks are shown, but no solution is found.

or

[1] 11, but no work or only one trial with an appropriate check is shown.

[0] A zero response is completely incorrect, irrelevant, or incoherent or is a correct response that was obtained by an obviously incorrect procedure.

MATHEMATICS A – *continued*

- (37) [3] $m\angle A = 65$ and $m\angle B = 25$, and appropriate work is shown.
- [2] Appropriate work is shown, but one computational error is made.
- or***
- [2] Appropriate work is shown to find 65 and 25, but the angles are not labeled or are labeled incorrectly.
- or***
- [2] An incorrect expression is written for angle A , but an appropriate equation is solved, and appropriate measures of angle A and angle B are found.
- or***
- [2] Appropriate work is shown to find $x = 25$, but no further correct work is shown.
- [1] Appropriate work is shown, but two or more computational errors are made.
- or***
- [1] Appropriate work is shown, but one conceptual error is made, such as solving the equation $3x + 15 = 180$ for both the measures of angle A and angle B .
- or***
- [1] A correct equation is written, but no further correct work is shown.
- or***
- [1] $m\angle A = 65$ and $m\angle B = 25$, but no work is shown.
- [0] $m\angle A = 65$ or $m\angle B = 25$, but no work is shown.
- or***
- [0] 65 and 25, but no work is shown, and the angles are not labeled or are labeled incorrectly.
- or***
- [0] A zero response is completely incorrect, irrelevant, or incoherent or is a correct response that was obtained by an obviously incorrect procedure.
-

Part IV

For each question, use the specific criteria to award a maximum of four credits. Unless otherwise specified, mathematically correct alternative solutions should be awarded appropriate credit.

(38) [4] $\triangle ABC$ and $\triangle A'B'C'$ are graphed and labeled correctly, and the coordinates of $\triangle A'B'C'$ are stated as $A'(7,-9)$, $B'(2,-8)$, and $C'(3,-4)$, and point reflection or dilation with a factor of -1 . (Note: rotation or rotation of 180° is an acceptable answer.)

[3] $\triangle ABC$ and $\triangle A'B'C'$ are graphed and labeled correctly, but the coordinates of $\triangle A'B'C'$ are not stated or are stated incorrectly, but a correct transformation is stated.

or

[3] $\triangle ABC$ and $\triangle A'B'C'$ are graphed and labeled correctly, and the coordinates of $\triangle A'B'C'$ are stated correctly, but the type of transformation is not stated or is stated incorrectly.

or

[3] $\triangle ABC$ is not graphed, but $\triangle A'B'C'$ is graphed and labeled correctly, and its coordinates are stated correctly, and a correct transformation is stated.

or

[3] $\triangle ABC$ is graphed incorrectly, but $\triangle A'B'C'$ is graphed and labeled appropriately, its coordinates are stated appropriately, and an appropriate type of transformation is stated.

[2] $\triangle ABC$ is graphed correctly, but one conceptual error is made, such as graphing an incorrect transformation, but the points are labeled appropriately, its coordinates are stated appropriately, and an appropriate type of transformation is stated.

or

[2] $\triangle ABC$ is not graphed, but $\triangle A'B'C'$ is graphed and labeled correctly, and its coordinates are stated correctly, but the type of transformation is not stated or is stated incorrectly.

or

[2] $\triangle ABC$ and $\triangle A'B'C'$ are graphed and labeled correctly, but the coordinates of $\triangle A'B'C'$ and the type of transformation are not stated or are stated incorrectly.

or

[2] $\triangle ABC$ and $\triangle A'B'C'$ are not graphed, but the correct coordinates of $\triangle A'B'C'$ and a correct transformation are stated.

MATHEMATICS A – *continued*

[1] Either $\triangle ABC$ or $\triangle A'B'C'$ is graphed correctly, but the coordinates of $\triangle A'B'C'$ and the type of transformation are not stated or are stated incorrectly.

or

[1] $A'(7,-9)$, $B'(2,-8)$, and $C'(3,-4)$, but no further correct work is shown.

or

[1] A correct transformation is stated, but no work is shown.

[0] A zero response is completely incorrect, irrelevant, or incoherent or is a correct response that was obtained by an obviously incorrect procedure.

- (39) [4] $(-2,2)$ and $(0,6)$, and appropriate algebraic or graphic work is shown.
- [3] Appropriate work is shown, but one computational or graphing error is made.
- or**
- [3] Appropriate algebraic work is shown, but only one solution is found correctly or only the x -values or the y -values are found correctly.
- or**
- [3] Both equations are graphed correctly showing two points of intersection, but the coordinates are not stated or are stated incorrectly.
- [2] Appropriate work is shown, but two or more computational or graphing errors are made, but appropriate coordinates are stated.
- or**
- [2] Appropriate work is shown, but one conceptual error is made.
- or**
- [2] The equation $y = x^2 + 4x + 6$ is graphed correctly, but no further correct work is shown.
- or**
- [2] $(-2,2)$ and $(0,6)$, but a method other than an algebraic or graphic solution is used, such as trial and error with at least three trials and appropriate checks.
- [1] Appropriate work is shown, but one conceptual error and one computational or graphing error are made.
- or**
- [1] The system of equations is simplified to a single equation, but no further correct work is shown.
- or**
- [1] The equation $y = 2x + 6$ is graphed correctly, but no further correct work is shown.
- or**
- [1] The trial-and-error method is attempted and at least six systematic trials and appropriate checks are shown, but the solutions are not found.
- or**
- [1] $(-2,2)$ and $(0,6)$, but no algebraic or graphic work is shown or the trial-and-error method is used and fewer than three trials and appropriate checks are shown.
- [0] $(-2,2)$ or $(0,6)$, but no algebraic or graphic work is shown or the trial-and-error method is used and fewer than three trials and appropriate checks are shown.
- or**
- [0] A zero response is completely incorrect, irrelevant, or incoherent or is a correct response that was obtained by an obviously incorrect procedure.

Map to Learning Standards

Key Ideas	Item Numbers
Mathematical Reasoning	13, 19, 29
Number and Numeration	6, 21, 33
Operations	1, 2, 4, 7, 10, 17, 18, 24
Modeling/Multiple Representation	8, 20, 30, 32, 35, 37, 38
Measurement	5, 9, 11, 14, 27, 28, 34, 36
Uncertainty	3, 16, 26
Patterns/Functions	12, 15, 22, 23, 25, 31, 39

Regents Examination in Mathematics A

August 2008

**Chart for Converting Total Test Raw Scores to
Final Examination Scores (Scaled Scores)**

The *Chart for Determining the Final Examination Score for the August 2008 Regents Examination in Mathematics A* will be posted on the Department’s web site <http://www.emsc.nysed.gov/osa/> on Wednesday, August 13, 2008. Conversion charts provided for previous administrations of the Mathematics A examination must NOT be used to determine students’ final scores for this administration.

Submitting Teacher Evaluations of the Test to the Department

Suggestions and feedback from teachers provide an important contribution to the test development process. The Department provides an online evaluation form for State assessments. It contains spaces for teachers to respond to several specific questions and to make suggestions. Instructions for completing the evaluation form are as follows:

1. Go to www.emsc.nysed.gov/osa/exameval.
2. Select the test title.
3. Complete the required demographic fields.
4. Complete each evaluation question and provide comments in the space provided.
5. Click the SUBMIT button at the bottom of the page to submit the completed form.

